

Name: _____

Period _____

Characteristics of Living Things

I can tell the difference between living and non-living things based on a list of characteristics that set the 2 apart.

Read pages 16-20 in your green textbook.

Part A

Look closely at each picture below. Decide whether each item is living, once-living, or non-living. If you think it is living or once-living, write "YES" next to the letter. If you think it is non-living, write "NO" next to the letter and a brief explanation why you decided it was non-living. Assume they are the actual thing and not a toy model for instance.



A. _____



B. _____



C. _____



D. _____



E. _____



F. _____



G. _____




H. _____



I. _____



J. _____



K. _____



L. _____

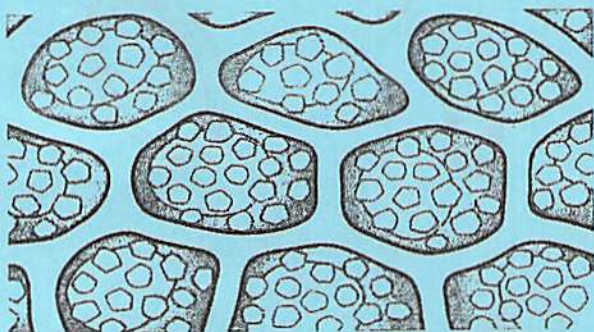
Part B

Unscramble the terms in *italics> to complete the sentences below. Write the correctly spelled terms on the lines provided .*

- _____ 1. A(n) *abrivlea* is something that changes in an experiment.
- _____ 2. A(n) *poehsyhtis* is a prediction that can be tested.
- _____ 3. *oshmeosaits* is how living things keep the proper conditions inside themselves.
- _____ 4. All living things are composed of one or more *lcles*.

Part C


Each illustration represents a trait of living things. Complete each sentence with the word or phrase that describes the trait. Refer to the headings in the reading text.



5. Living things
are _____.



6. Living things _____.



7. Living things take in and
use _____.



8. Living things _____.



9. Living things
_____.